

**Third Grade
Social Studies
Week 4**


April 27 - May 1, 2020

NAME _____ P ____

North America



A _____ is a country in North America.



B _____ is a country in North America.



C _____ is a country in North America.



D _____ is a state in the United States.



E These _____ are part of North America.



F There are many small _____ in North America.




A seven countries



B island countries




C The United States



D Canada



E Alaska



F Mexico



North America

Part 1

Write the letter on the answer card that matches the question card.

Question	Answer
1.	_____
2.	_____
3.	_____
4.	_____
5.	_____
6.	_____

Part 2

Write the names of the three countries on the map.



Bodies of Water

Write the name of the waterway that completes each sentence.
Use the words in the box to help you.

bay	gulf	lake	ocean	river	sea
-----	------	------	-------	-------	-----

1. A large body of fresh water surrounded by land is called a _____

2. A large body of salt water that surrounds a continent is called an _____

3. A large area of ocean partially surrounded by land and larger than a bay is called a _____

4. A large natural stream of fresh water that flows into a lake or an ocean is called a _____

5. An area of the ocean that is partially enclosed by land and smaller than a gulf is called a _____

6. A body of water that is usually part of an ocean, and is partially or completely enclosed by land is called a _____

Bonus:

What are the names of the four oceans of the world?

Bodies of Water



Our planet has a great amount of water. We know of no other planet that has huge amounts of water all over it. If you looked at Earth from outer space you would see more water than land. Water covers over seventy-one percent of the surface of the Earth.

We use the water for drinking, washing, agricultural crops, and a host of other things. It is the main reason the Earth has so much life on it. The water makes it easy for us to transport products all over the world on ships.



Most of the water is in the oceans. The oceans are very large. The whole country of the United States is much smaller than the Pacific Ocean. There are five large oceans. They are: the Atlantic, Pacific, Indian, Arctic, and the Antarctic. At the present time oceanographers consider all oceans and seas part of the Atlantic, Pacific, or Indian oceans.



Read each sentence below. Fill in the missing word.

1. _____ percent of the Earth is covered by water.
2. Most of the water is in the _____.
3. We know of no other _____ that has as much water.
4. There are _____ large oceans.

Name _____

Record Sheet

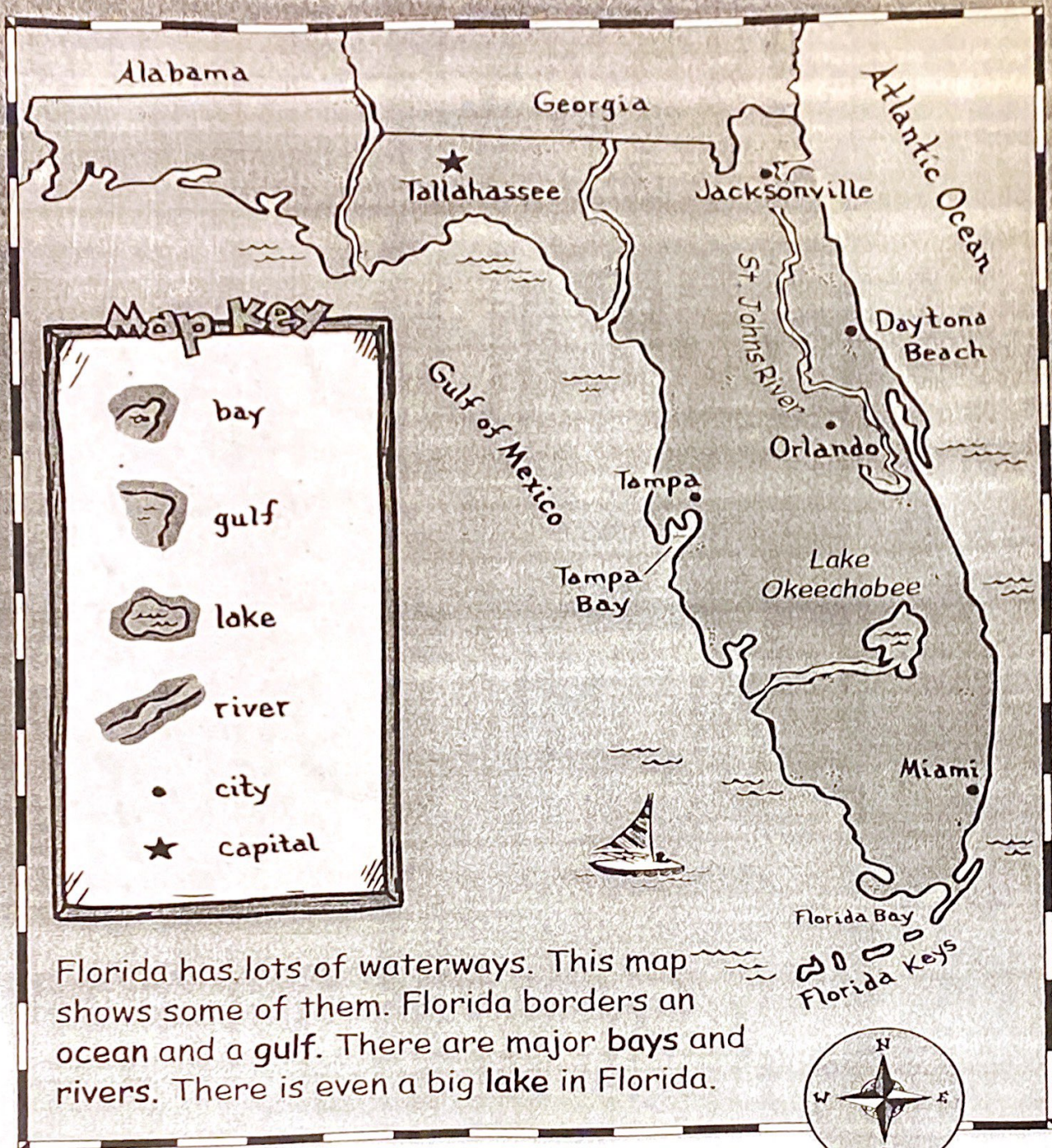
Florida's Waterways

Write the answer to each question card on the lines below.

1. _____
2. _____
3. _____
4. _____
5. _____
6. _____
7. _____
8. _____



Florida's Waterways



1. An ocean is a large body of salt water.

Which ocean borders Florida?



2. A gulf is a large area of ocean.

- It is partly surrounded by land.
- It is larger than a bay.

Which large gulf borders Florida?



3. A bay is an area of ocean or lake.

- It is partly surrounded by land.
- It is smaller than a gulf.

Which bay is on the southern tip of Florida?



4. A river is a large stream of water that flows across land.

Which river is labeled on the map of Florida?



5. A lake is a body of water with land all around it.

Which big lake is in Florida?

What kind of waterway flows from the lake?



6. On a map, the capital of a state is shown with a star.

What is the capital of Florida?

What kind of waterway is both east and west of it?



7. On a map, a city in a state is shown with a dot.

Which city is in western Florida?

Which waterway is named after it?



8. The coast is land that is next to an ocean.

Which city is on the southeast coast of Florida?

Which city is on the northeast coast of Florida?

